







Terazide eşitliği sağlayınız.



$$2 = 2$$





Birbiriyle eşit olan sayıların arasına = işareti koyunuz.

$5 = 5$

$6 \neq 8$

$7 \neq 5$

$4 \neq 8$

$6 \neq 18$

$15 \neq 5$

$13 \neq 13$

$5 \neq 9$

$7 \neq 7$

$5 \neq 11$

$3 \neq 3$

$2 \neq 2$

$17 \neq 5$

$10 \neq 10$

$14 \neq 14$



Sonucu eşit olan işlemleri aynı renkle işaretleyiniz.

$5 + 4 = \dots$

$20 + 10 = \dots$

$11 + 1 = \dots$

$7 - 2 = \dots$

$10 - 5 = \dots$

$3 + 3 = \dots$

$6 + 0 = \dots$

$8 + 2 = \dots$

$4 + 8 = \dots$

$6 + 3 = \dots$



Eşitliği sağlamak için boşluğa hangi sayı yazılmalıdır?

$$\begin{array}{r} 3 \\ + 2 \\ \hline 5 \end{array} \quad \begin{array}{r} 4 \\ + \dots \\ \hline 5 \end{array}$$

$$\begin{array}{r} 2 \\ + 2 \\ \hline 4 \end{array} \quad \begin{array}{r} 3 \\ + \dots \\ \hline 4 \end{array}$$

$$\begin{array}{r} 2 \\ + 4 \\ \hline 6 \end{array} \quad \begin{array}{r} \dots \\ + 3 \\ \hline 6 \end{array}$$

$$\begin{array}{r} 5 \\ + 5 \\ \hline 10 \end{array} \quad \begin{array}{r} \dots \\ + 3 \\ \hline 10 \end{array}$$

$$\begin{array}{r} 5 \\ + 2 \\ \hline 7 \end{array} \quad \begin{array}{r} 4 \\ + \dots \\ \hline 7 \end{array}$$

$$\begin{array}{r} \dots \\ + 2 \\ \hline 8 \end{array} \quad \begin{array}{r} 4 \\ + 4 \\ \hline 8 \end{array}$$

$$\begin{array}{r} 7 \\ + \dots \\ \hline 10 \end{array} \quad \begin{array}{r} 4 \\ + 6 \\ \hline 10 \end{array}$$

$$\begin{array}{r} 6 \\ + \dots \\ \hline 6 \end{array} \quad \begin{array}{r} 2 \\ + 4 \\ \hline 6 \end{array}$$